

WS 01: Pitch notation

Name _____

A. Pitch names. Below the staff, provide the *specific* pitch name. Use the ASA convention: e.g. C4 = middle-C.

The image shows four musical staves, each with a single note. The notes are placed on various lines and spaces of the staves. Below each note is a small circle with a horizontal line underneath it, representing a pitch label. The notes and their corresponding pitch labels are as follows:

- Staff 1 (Treble clef): Note on the second space (D4), pitch label $\underline{\text{D}}$.
- Staff 2 (Bass clef): Note on the second space (D3), pitch label $\underline{\text{D}}$.
- Staff 3 (Clefless): Note on the second space (D4), pitch label $\underline{\text{D}}$.
- Staff 4 (Clefless): Note on the second space (D4), pitch label $\underline{\text{D}}$.

B. Notate the pitch that exactly matches the one given.

1.

4.

2.

5.


3.


6.

WS 01, continued

C. Provide the pitch one octave *above* the one given.

1. 


2. 

3. 

4. 

D. Provide the pitch one octave *below* the one given.

1. 

2. 


3. 

4. 


E. Provide the *clef* that will match each note with the given pitch.


1. 


2. 

3. 

4. 

5. 


6. 

7. 

8. 

9. 

10. 

11. 

12. 