
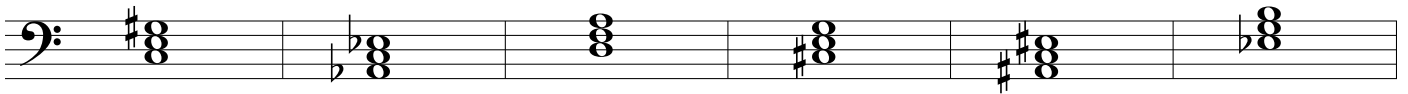
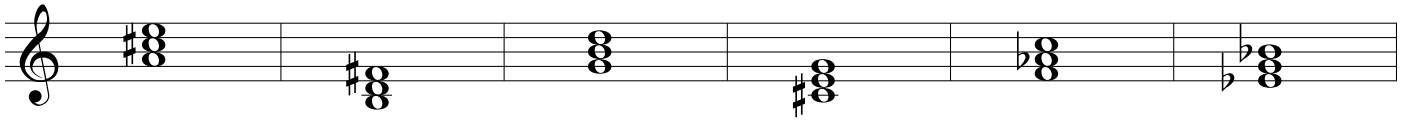


**WS 25: Triad Identification I**

Name \_\_\_\_\_

A. Identify the quality of all the triads (M, m, A, d). But watch out: not all examples are triads (mark non-triads with an "X").



B. Key signatures added. Identify triad quality only (M, m, A, d). Mark non-triads with an "X".

