

WS 44: Modes II


Name _____



Notate the indicated modes (for odd-numbered examples, **do not** use a signature; for even-numbered examples, **do** use a signature).

1. Mixolydian on A  2. Phrygian on G 

3. Dorian on F  4. Lydian on D 

5. Phrygian on C#  6. Mixolydian on Bb 



7. Lydian on Ab  8. Dorian on B 


9. Ionian on Db  10. Aeolian on C# 

11. Mixolydian on Eb  12. Locrian on A 

13. Dorian on F#  14. Lydian on Db 

15. Phrygian on C  16. Mixolydian on E 

17. Lydian on A  18. Dorian on Bb 

19. Aeolian on Eb  20. Phrygian on F 